


If $4x = 3.48$

Find the value of $8x + 3$

If 80% of a year group are male
and there are 50 female students
How many male are there?




165 more students walked to school
than got the bus.

How many rode the bus?

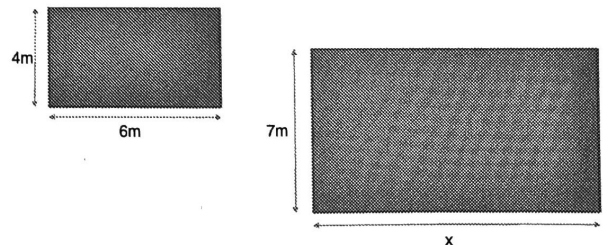
A train leaves Euston station at 7am
It travels to Birmingham at a
constant speed of 63mph

How far is away is it from
Birmingham to London if the train
arrives at 9.20am?



The 12kg bag of sand costs £24

What should a 3.5kg bag cost?



If the rectangles are similar

What is the length marked 'x'?